



### 4.3.1.15 Lange vermenigvuldigingen


NAAM:


GROEP:





VERMENIGVULDIGEN


Vermenigvuldig het grootste getal met het kleinste getal en tel er 12 bij op. Schrijf het antwoord in de cirkel.


$$\begin{array}{r|l} 6 & 9 \\ \hline 7 & 8 \end{array}$$



$$\begin{array}{r|l} 4 & 5 \\ \hline 3 & 6 \end{array}$$



$$\begin{array}{r|l} 1 & 2 \\ \hline 5 & 4 \end{array}$$



$$\begin{array}{r|l} 6 & 5 \\ \hline 8 & 9 \end{array}$$



$$\begin{array}{r|l} 4 & 3 \\ \hline 8 & 5 \end{array}$$



$$\begin{array}{r|l} 4 & 10 \\ \hline 6 & 9 \end{array}$$



$$\begin{array}{r|l} 4 & 6 \\ \hline 3 & 7 \end{array}$$


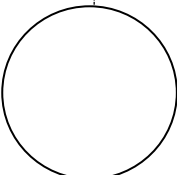
$$\begin{array}{r|l} 6 & 7 \\ \hline 5 & 6 \end{array}$$


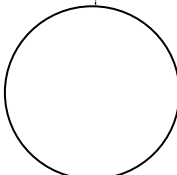
$$\begin{array}{r|l} 7 & 8 \\ \hline 8 & 9 \end{array}$$


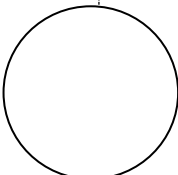
$$\begin{array}{r|l} 6 & 4 \\ \hline 5 & 7 \end{array}$$


$$\begin{array}{r|l} 2 & 3 \\ \hline 9 & 5 \end{array}$$


$$\begin{array}{r|l} 6 & 5 \\ \hline 8 & 7 \end{array}$$


$$\begin{array}{r|l} 2 & 9 \\ \hline 1 & 10 \end{array}$$


$$\begin{array}{r|l} 4 & 7 \\ \hline 3 & 8 \end{array}$$


$$\begin{array}{r|l} 6 & 5 \\ \hline 6 & 7 \end{array}$$


$$\begin{array}{r|l} 2 & 3 \\ \hline 6 & 4 \end{array}$$
